

SUMMATIVE ASSESSMENT –I

GRADE –II

REVISION WORK SHEET

SUBJECT: ENGLISH

BLOCK 1

1. Write 10 word pairs like “ Blue Lake”,
“Yummy cake” and underline the describing word.

Example : A. Blue Lake B. Yummy cake

2. Write a sentence using
A. Scary B. Lovely

3. Write as many describing words as you think of
describe the Sam's tiger mask.

4. Write 4 sentences about yourself using describing words.

BLOCK 2

1. Write 3 words that rhyme with star.

2. Complete the poem using words from the box

Cart park bark yard shark hard

Jack and Jill went to the _____

To play before it go too _____

They saw a dog that could not _____

And had ugly teeth like a great while _____

B. Write two pairs of rhyming words.

C. Write two things you will do with your pet dog.

BLOCK 3

1. Read the steps of recipe and put them in correct order.

A. Add some peanuts.

B. Chop an onion. Add it to the sprouts.

C. Squeeze a lemon.

D. Put the sprouts in a bowl.

E. Sprinkle salt and pepper. Mix well.

F. Serve and enjoy.

2. Answer the questions.

A. Who cooks at your home?

B. What kind of food can you make?

BLOCK 4

- Underline the 'doing' words.
 - I brush my teeth.
 - I go to school everyday.
 - I eat sandwiches.
 - I play in the evening.
 - I pick flowers.
 - I sleep at night.
- Choose the correct 'doing' word and fill in the blanks.
 - Birds _____ in the sky.(fly/hear)
 - Fish _____ in the water.(write/swim)
 - Boys _____ in the playground.(sleep/play)

BLOCK 5

- Write the favourite food of your state and of two neighbouring states.
- You see a little boy lost in the market. Write 3 questions that you will ask the child to help him find his house.
- Write a letter to your friend to share the things you do when go home after the school.

BLOCK 6

- Rearrange the following letters.
 - LE D A R D
 - E T R L T E
 - K R I S T
 - R S E P U
 - K O R F
- Write the rhyming words for,
 - ask, task, _____, _____.
 - bulk,sulk,_____,_____.
 - Camp,ramp,_____,_____.
 - Pelt,felt,_____,_____.
- Write 2 sentences using the word kindly.

BLOCK 7

Read the story and answer.

BHOLU

Rakhi had a rat. His name was BHOLU. She built a little house for him. The house had a door with a lock. One day after playing with BHOLU she went out . Oh no, she forgot to lock the door! Suddenly she felt something soft move over her feet. It was BHOLU! He ran ran and hid behind the cupboard. Rakhi jumped up to catch him. But he hide under the blanket. She finally found him and put him back in his house.

A. What did Rakhi build for BHOLU?

B. How did BHOLU get out of his house? Write a full sentence.

C. Fill in the table.

Problem	Solution
BHOLU got out of his house	

D. What do you think Rakhi will remember to do?

BLOCK 8

1. Write a sentence using following words and add **but** in it.

A. Hot and cold.

B. Wet and dry.

2. Underline the opposite words.

A. Hot Wet Down Cold

B. Up Near Cold Down

C. Dry Far Wet Hot

SUMMATIVE ASSESSMENT –I

GRADE –II

REVISION WORK SHEET

SUBJECT: MATH

BLOCK 1

1. Write numbers and number names from 1-20.
2. Create a number pattern using skip counting by 2 for numbers upto 20.
3. Write all odd numbers between 1 and 10.
4. Write all the even numbers between 1 and 20.

BLOCK 2



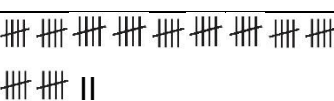
1. Fill in the missing numbers using skip counting

A. 0	2				
B. 0	3				
C. 0	5				
D. 0	10				

2. Complete the given number pattern by counting forward.
A. 14,16,18,____,____,____,____.
3. Complete the given number pattern by counting backward.
A. 90,80,70,____,____,____,____.

BLOCK 3

1. Count the bundles. Write how many tens and ones and the number.

	4 tens and 3 ones	43
		
		

2. Write the place value and the face value of the underlined digit.
A. 67 B. 30 C. 88 D. 155
3. Write expanded form of each number in two ways.
A. 68. B. 99. C. 17. D. 4
4. Draw an abacus showing ,
A. 27 B. 81 C. 115

BLOCK 4

- Write numbers as hundreds, tens and ones.
A. 127. B. 169. C.193. D. 106
- Which digit has same place value and face value in 136?
- Write the numbers.
A. $100+30+7$. B. $100+3$. C. 1 hundred+ 6 tens+ 2 ones. D.1 hundred + 8 tens

BLOCK 5

- Find the numbers.
A. 1 less than 387 _____. B. 1 more than 319 _____
C. 0 less than 400 _____. D. 10 more than 302 _____
- Write the number names and the expanded forms.
A. 253. B. 690. C.474. D. 900
- State true or false.
A. The place value of 8 in 298 is 80. _____
B. The face value of 9 in 949 is 900. _____
C. The place value and the face value of 7 in 817 is same. _____
- Compare the given numbers.
A. 423 ____ 390 B. 389 ____ 100
B. 689 ____ 721 D. 734 ____ 734

BLOCK 6

- Write the smallest and the greatest 3 digit numbers with the given digits.
A. 4,5,0 B. 3,7,2. C 9,6,8.
- Arrange in ascending order.
A. 390, 903, 930, 309. B.328, 247, 949, 951.
- Arrange in descending order.
A. 455, 459, 451, 450.
- Write any two digits number smaller than 999.

BLOCK 7

- Write all the addition facts for 15.
- Write the addition sentence to make 10 and then add.
A. $9+3$ B. $8+5$ C. $7+5$ D. $7+6$
- Add the given numbers.
A. $6+5+4$ B. $5+2+8$ C. $2+6+4$ D. $5+6+9$
- Find the total.
A. 3 pieces of chalk and 9 pieces of chalk.
B. 7 erasers and 4 erasers.

BLOCK 8

- Add the following.
A. $17+22=1$ tens 7 ones + 2 tens 2 ones = 3 tens 9 ones = 39
B. $36+12=$ __tens__ones+__tens__ones=__tens__ones=__
C. $58+11=$ __tens__ones+__tens__ones=__tens__ones=__
- Add $25+22+11$ using vertical method.
- Add
A. Tens Ones B. Tens Ones. C. Tens Ones D. Tens Ones

1	5	6	5	7	1	2	4
+ 3	2	+ 1	2	+ 2	4	+ 3	2
<hr style="border: 0; border-top: 1px solid black; margin: 5px 0;"/>							
<hr style="border: 0; border-top: 1px solid black; margin: 5px 0;"/>							
- Add.
A. There are 30 hens on a farm. The farmer brought 29 more hens. How many hens are there now?
B. Piya, Pinki and Piyush have 22,33 and 44 marbles respectively. How may marbles they have they in all?
C. Frame an addition word problem with numbers 22 and 23. Solve it using vertical addition.

SUMMATIVE ASSESSMENT –I

GRADE –II

REVISION WORK SHEET

SUBJECT: EVS

BLOCK 1

1. What is a family tree?
2. Write 3 ways in which you can help your family members?
3. How do your parents help you? How do you help your parents? Write your answers in given columns.

Things your family does for you	Things you do for your family

4. Write 2 or 3 ways in which you can help your grandparents.

BLOCK 2

1. Tick which of the following dangers people had to face before they learnt to build houses.
A. Rain B. Wild animals C. Cars D .No food
2. Look at these things below and write what they are made of.

A. Roof _____



B. Window _____



C. Floor _____



D. Door _____



3. Match the columns.

- A. Mason
- B. Carpenter
- C. Plumber
- D. Engineer
- E. Labourer

- a. Carries building material .
- b. builds wooden doors and windows.
- c. lays bricks.
- d. fixes pipes in the bathrooms and Kitchen.
- e. tells us how to build our house.


4. Write the names of 2-3 types of your houses you have seen in your city and neighbourhood.

BLOCK 3

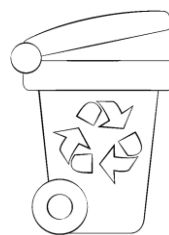
- 1. Why should we live in a clean surrounding?
- 2. Look at the pictures and answer the questions sort the waste by writing their names under the correct bin

Orange peels, Plastic wrappers, Dried leaves, Dirty bottles

A.



Green bin



Red bin

- B. Why do we use different bins to throw away the house waste?
- C. In which bin would you throw an empty shampoo bottle? Give a reason

3. State whether True or False.

- A. We should throw waste on the road. _____
- B. We should not let water collect anywhere. _____
- C. We should not throw waste in the dustbins. _____
- D. Waste such as food and leaves get spoilt easily. _____

BLOCK 4

1. A. circle the places where rocks are found

River	Sea	Land	Air
-------	-----	------	-----

B. Tick the correct sentence.

- a. Soil keeps breaking into smaller pieces to become rocks. ()
 - b. Rocks keep breaking into smaller pieces until they become soil. ()
2. Write the names of any 2 things that are made up of rocks.
3. Match the soil to the place.
- | | |
|----------------|--------------------------|
| A. Clayey soil | a. found on the seashore |
| B. Sandy soil | b. found near a river |
4. Which soil has too much water?

BLOCK 5

1. How do we keep in touch with people?

2. Name the fastest and the slowest means of communication.

3. Nimra lives in Delhi. She is going to Lucknow to visit her grandparents.
She took the (A) _____ (bus/horse) to the railway station. The (B) _____
(train/horse-cart) took her to Lucknow. There, her parents drove. (C) _____ (car/train)
and picked her up. She saw many (D) _____ (horse-carts/ships) and
(E) _____ (rickshaws/planes) on the road

4. A. What is information?

B. Look at the pictures and match how each of these communicates information.

a. Listening



b. Watching



c. Reading

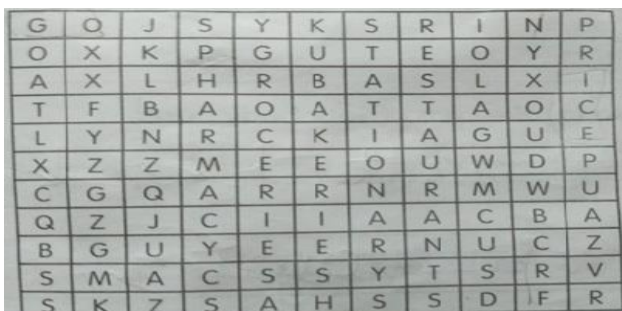


BLOCK 6

1. Where can we find a market?
2. Name 3 types of shops you can find in a market place.
3. Match the item to the shop it is found in.

Gourd , brinjal	Fruit shop
Apple ,banana	Vegetable shop
Pens ,pencils	Pharmacy
Medicines	Stationary shop
Fruit juices	Ice-cream stall
Ice -cream	Juice stall

4. Find the words in the puzzle



BLOCK 8

1. Write the direction in which the neck will move to do each activity.

A. To see stars in the sky _____

B. To cross the road _____

C. To count the number of tiles on the floor _____


2. If you are unable to bend your knees which of the activities will you be unable to do? Tick in the box.

Jump	Sit cross –legged	Skip a rope
------	-------------------	-------------

3. Draw and label the different parts of the leg.

4. A. Name 1 thing you can do by moving your neck.

B. Tick the activities that cannot be done without the movement of the waist.



1. Write Vernamala ് to ്.

2. Write the next letter of given letter.

a) ്: _____

b) ്: _____

c) ്: _____

d) ്: _____

e) ്: _____

f) ്: _____

g) ്: _____

h) ്: _____

i) ്: _____

j) ്: _____

Telugu Revision Worksheet - II Grade - II

3) Encircle the next letter of the given letter.

a) క - క, ఖ, గ

b) ఖ - క, గ, చ

c) చ - ఛ, జ, క

d) జ - క, ఛ, డ

e) క - క, ఖ, చ

f) గ - జ, చ, జ

g) డ - జ, చ, ఙ

h) ఛ - జ, డ, జ

i) జ - జ, ఙ, జ

j) ఙ - అ, ఙ, ఙ

۱۔ مندرجہ ذیل خالی جگہ مکمل کیجئے۔ Fill in the blanks

- ۱۔ ا ت ث
 ۲۔ ج د ڈ
 ۳۔ ذ ر س ش
 ۴۔ ض ط ع ف
 ۵۔ ک م و

۲۔ مندرجہ ذیل حروف کے درمیان میں کون سا حرف آتا ہے۔ Which letter comes inbetween

- ۱۔ ن ح
 ۲۔ ذ ص
 ۳۔ ع ف
 ۴۔ ک ل
 ۵۔ ن ہ
 ۶۔ ط ع
 ۷۔ چ خ
 ۸۔ م و
 ۹۔ ج ح
 ۱۰۔ ص ط
 ۱۱۔ ب ت
 ۱۲۔ ر ز
 ۱۳۔ ف ک
 ۱۴۔ ج ح
 ۱۵۔ ت ث
 ۱۶۔ گ م

Split the letters

۳۔ مندرجہ ذیل الفاظ کے حروف الگ کیجئے

۱۔ مور

۲۔ شور

۳۔ شوق

۴۔ لوگ

۵۔ زدل

Join the letters

۴۔ مندرجہ ذیل حرف کو جوڑ کر لکھیے۔

= ا ب + س

= ک + ل

= ۳۔ چ + ل

= ۴۔ آ + م



= ۵۔ د + س

Write the Urdu alphabet

۴۔ الف سے لے کر حروف تہجی لکھیے۔

Colour the pictures and name them

۵۔ مندرجہ ذیل پھلوں کے نام لکھ کر روم بھریئے۔



Rewrite the words

۶۔ مندرجہ ذیل الفاظ کا لکھیے۔

۵۔ ٹل

۴۔ 4

۳۔ جا

۲۔ آنا

Draw the pictures of flowers

۷۔ پھولوں کی تصاویر تیار کیے۔